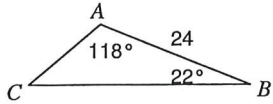


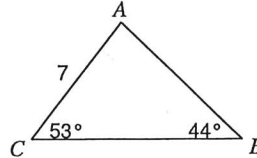
The Law of Sines

Find each measurement indicated. Round your answers to the nearest tenth.

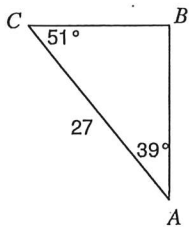
1) Find AC



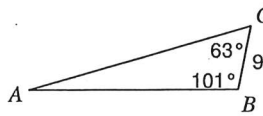
2) Find AB



3) Find BC



4) Find AB



5) Find BC

